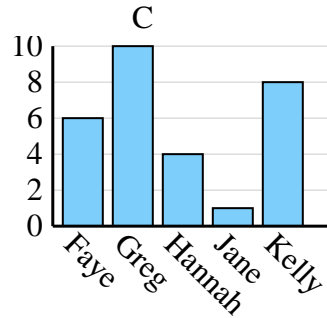
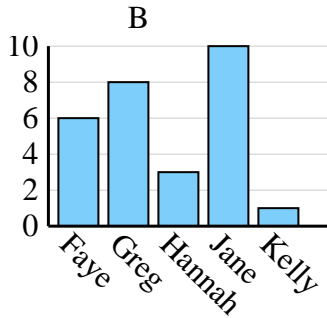
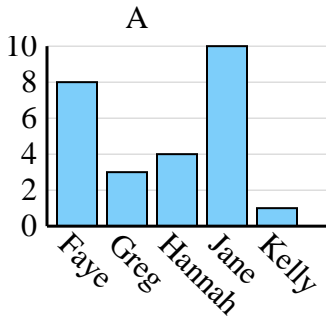




Determine which graph (A, B or C) best represents the information in the table.

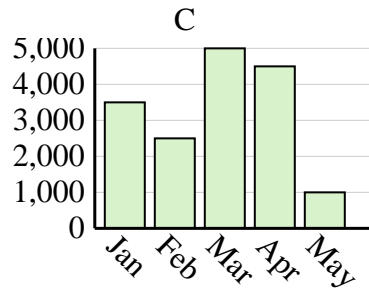
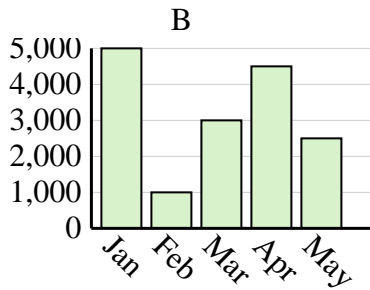
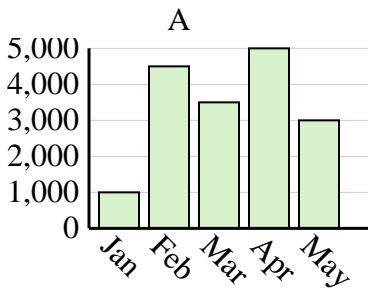
Answers

1)	Name	Faye	Greg	Hannah	Jane	Kelly
	States Lived In	6	10	4	1	8

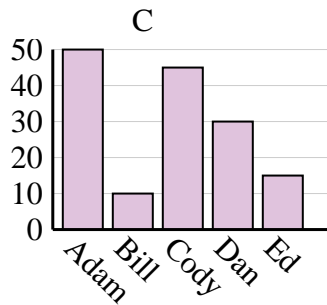
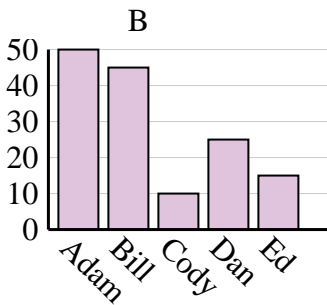
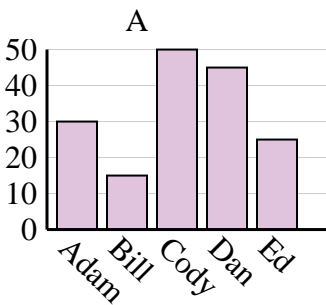


1. _____
2. _____
3. _____
4. _____

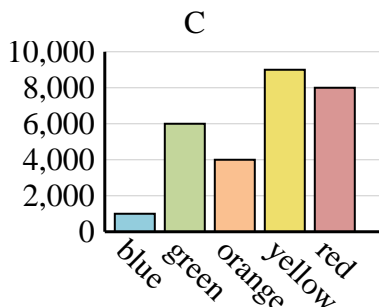
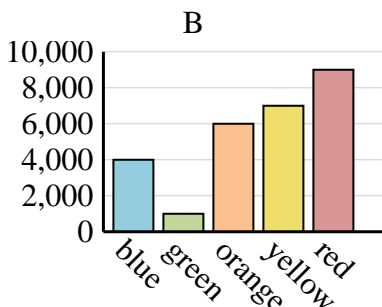
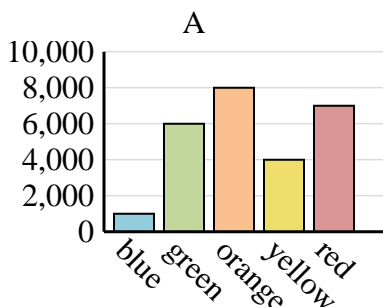
2)	Sales	Jan	Feb	Mar	Apr	May
	Month	3,500	2,500	5,000	4,500	1,000



3)	Name	Adam	Bill	Cody	Dan	Ed
	Points	30	15	50	45	25



4)	Favorite Color	blue	green	orange	yellow	red
	People	4,000	1,000	6,000	7,000	9,000

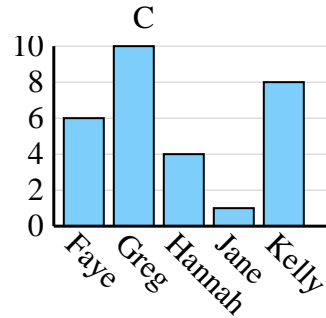
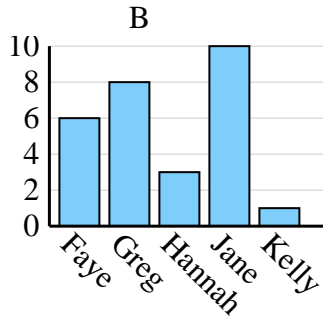
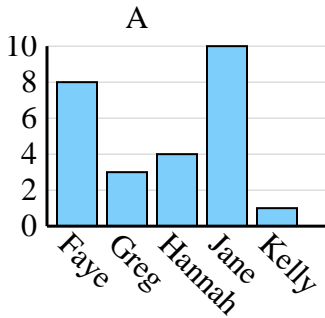




Determine which graph (A, B or C) best represents the information in the table.

Answers

Name	Faye	Greg	Hannah	Jane	Kelly
States Lived In	6	10	4	1	8



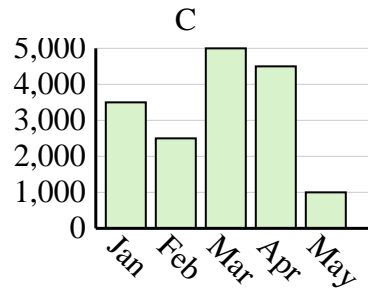
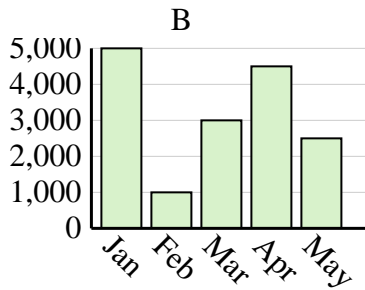
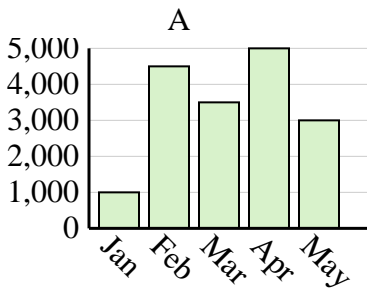
1. **C**

2. **C**

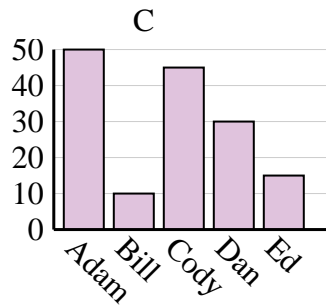
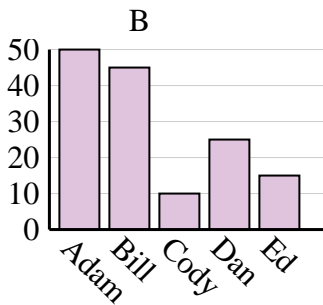
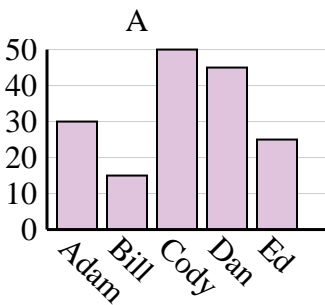
3. **A**

4. **B**

Sales	Jan	Feb	Mar	Apr	May
Month	3,500	2,500	5,000	4,500	1,000



Name	Adam	Bill	Cody	Dan	Ed
Points	30	15	50	45	25



Favorite Color	blue	green	orange	yellow	red
People	4,000	1,000	6,000	7,000	9,000

